


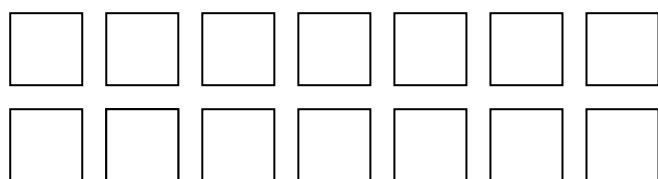
Escola Nossa Senhora do Amparo - Mirandela  
Matemática 1º ano



Nome: \_\_\_\_\_

Data: \_\_\_\_/\_\_\_\_/\_\_\_\_

1 – Pinta uma dezena de quadrados.



10 – Uma dezena

2 – Completa por ordem crescente.

0		2					7			
---	--	---	--	--	--	--	---	--	--	--

3 – Completa por ordem decrescente.

		8				4			1	
--	--	---	--	--	--	---	--	--	---	--

4 – Resolve.

$9+1 = \underline{\quad}$

$2+3+5 = \underline{\quad}$

$10 = 5+\underline{\quad}$

$8+2 = \underline{\quad}$

$1+3+6 = \underline{\quad}$

$10 = 4+\underline{\quad}$

$7+3 = \underline{\quad}$

$4+5+1 = \underline{\quad}$

$10 = 3+\underline{\quad}$

$6+4 = \underline{\quad}$

$5+3+2 = \underline{\quad}$

$10 = 2+\underline{\quad}$

$5+5 = \underline{\quad}$

$4+3+3 = \underline{\quad}$

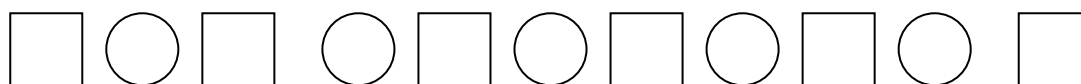
$10 = 1+\underline{\quad}$

$4+6 = \underline{\quad}$


$5+1+4 = \underline{\quad}$

$10 = 6+\underline{\quad}$

5 – Conta de 2 em 2, do 0 ao 10. Completa



6 – Decompor a quantidade 10.



3+__
4+__
2+__
1+__
__+5