


COLÉGIO NOSSA SENHORA DO AMPARO -  
MIRANDELA

Matemática - 1º ano




Nome: \_\_\_\_\_

Data: \_\_\_\_/\_\_\_\_/\_\_\_\_

**1- Pinta as bolas indicadas pelos algoritmos.**

2+5	○	○	○	○	○	○	○	○	○	○
4+2	○	○	○	○	○	○	○	○	○	○
6+4	○	○	○	○	○	○	○	○	○	○

**2- Pinta uma dezena de flores.**



**3- Efectua e escreve >, < ou =.**

3 + 2		4 + 5
-------	--	-------

4 - 1		2 + 2
-------	--	-------

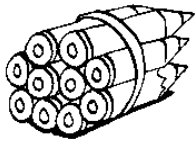
9 - 4		2 + 3
-------	--	-------

6 - 3		7 + 1
-------	--	-------


7 - 5		1 + 2
-------	--	-------

4 + 5		5 + 3
-------	--	-------

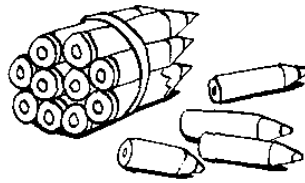
4. Completa as imagens de acordo com o exemplo.



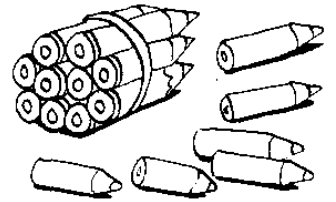
10 dez



\_\_\_\_\_

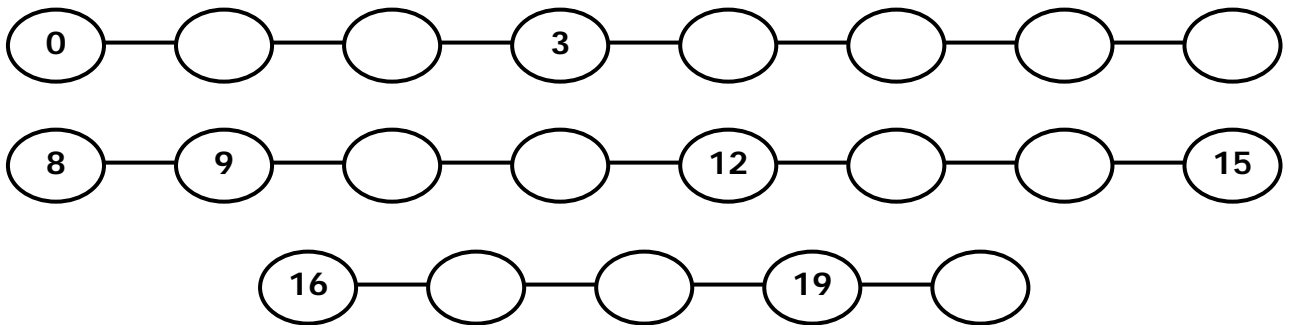


\_\_\_\_\_

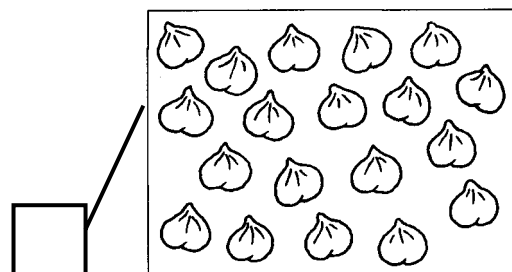
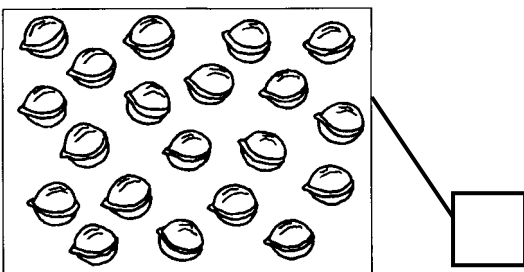


\_\_\_\_\_

5. Escreve os números que faltam.



6. Circula as dezenas e escreve o número.



7 - Escreve os números que estão: antes, entre, depois.

Antes		Depois
	4	
	9	
	5	
	6	
	2	

	Entre	
7		9
5		7
2		4
0		2
1		3