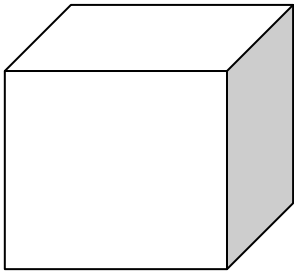
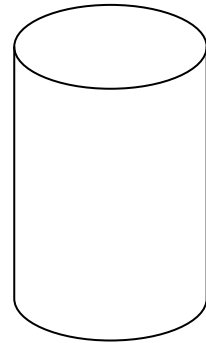


MATEMÁTICA


Baseando-te nas características de cada sólido geométrico, inventa uma adivinha para cada um deles.



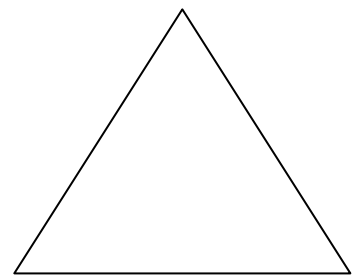
Sólido A



Sólido B



Sólido C



Sólido D
